

Name:

--

MWF 9 Jameel Al-Aidroos
MWF 9 Dennis Tseng
MWF 10 Yu-Wei Fan
MWF 10 Koji Shimizu
MWF 11 Oliver Knill
MWF 11 Chenglong Yu
MWF 12 Stepan Paul
TTH 10 Matt Demers
TTH 10 Jun-Hou Fung
TTH 10 Peter Smillie
TTH 11:30 Aukosh Jagannath
TTH 11:30 Sebastian Vasey

- Start by printing your name in the above box and please **check your section** in the box to the left.
- Do not detach pages from this exam packet or unstaple the packet.
- Please write neatly. Answers which are illegible for the grader cannot be given credit.
- **Show your work.** Except for problems 1-3 or problem 9, we need to see **details** of your computation.
- All functions can be differentiated arbitrarily often unless otherwise specified.
- No notes, books, calculators, computers, or other electronic aids can be allowed.
- You have 90 minutes to complete your work.

1		20
2		10
3		10
4		10
5		10
6		10
7		10
8		10
9		10
10		11
Total:		110

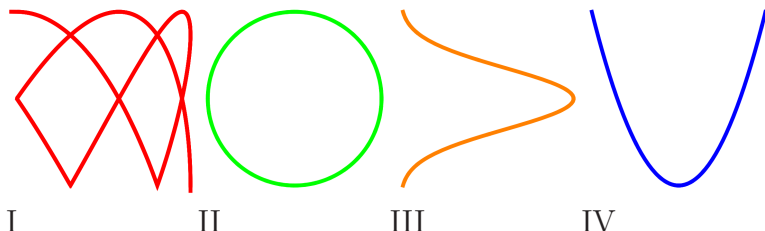
Problem 1) (20 points) No justifications are needed.

- 1) T F The surface $-x^2 + y^2 + z^2 = -1$ is a one-sheeted hyperboloid.
- 2) T F The equation $y = 3x + 2$ in space defines a plane.
- 3) T F Whenever $|\vec{r}'(t)| = 1$ then $|\vec{T}'(t)| = 1$.
- 4) T F The length of the vector projection $\text{Proj}_{\vec{v}}(\vec{w})$ is smaller than or equal to the length of \vec{w} .
- 5) T F The velocity vector of $\vec{r}(t) = \langle t, t, t \rangle$ at time $t = 2$ is the same as the velocity vector at $t = 1$.
- 6) T F If $\vec{v} \times \vec{w} = \vec{w} \times \vec{v}$ then \vec{v}, \vec{w} are parallel.
- 7) T F The vector $\langle -2, 1, 0 \rangle$ is perpendicular to the line $\langle 1 + t, 2t, 3t \rangle$.
- 8) T F The point given in spherical coordinates as $\rho = 3, \phi = 0, \theta = \pi$ is the same point as the point $\rho = 3, \phi = 0, \theta = 0$.
- 9) T F The parametrized curve $\vec{r}(t) = \langle 0, 3 \cos(t), 5 \sin(t) \rangle$ is an ellipse.
- 10) T F The curvature of the line $\vec{r}(t) = \langle t, t, t \rangle$ is $\sqrt{3}$ everywhere.
- 11) T F If $|\vec{v} \times \vec{w}| = \vec{v} \cdot \vec{w}$ then either \vec{v} is parallel to \vec{w} or perpendicular to \vec{w} .
- 12) T F If the dot product between two unit vectors \vec{v}, \vec{w} is -1 , then $\vec{v} = -\vec{w}$.
- 13) T F Writing $\vec{k} = \langle 0, 0, 1 \rangle$, we have $|(\vec{k} \times \vec{v}) \times \vec{w}| \leq |\vec{v}||\vec{w}|$ for all vectors \vec{v}, \vec{w} .
- 14) T F The curvature of a curve $\vec{r}(t)$ is given by $\kappa(t) = |\vec{T}'(t)|/|\vec{r}'(t)|$. If $|\vec{r}'(t)| = 1$ for all times, then $\kappa(t) = |\vec{r}''(t)|$.
- 15) T F The arc length of the curve $\langle \sin(t/2), 0, \cos(t/2) \rangle$ from $t = 0$ to $t = 2\pi$ is equal to 2π .
- 16) T F If L, K are skew lines in space, there is a unique plane which is equidistant from L, K .
- 17) T F The curve $\vec{r}(t) = \langle t, t^2, 1 - t \rangle$ is the intersection curve of a plane $x + z = 1$ and $y = x^2$.
- 18) T F The lines $\vec{r}_1(t) = \langle 5 + t, 3 - t, 2 - t \rangle$ and $\vec{r}_2(t) = \langle 6 - t, 2 + t, 1 - 2t \rangle$ intersect at $(6, 2, 1)$ perpendicularly.
- 19) T F The vector $\langle 3/13, 12/13, 4/13 \rangle$ is a unit vector.
- 20) T F $\vec{v} \times (\vec{v} \times \vec{u}) = \vec{0}$ for all vectors \vec{u}, \vec{v} .

Total

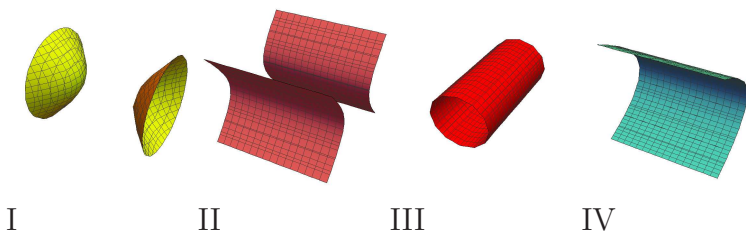
Problem 2) (10 points) No justifications are needed in this problem.

a) (2 points) Match the plane curves with their parametrizations $\vec{r}(t)$. Enter O, if there is no match. In each of the problems a) - e), every of the entries O, I, II, III, IV appears exactly once.



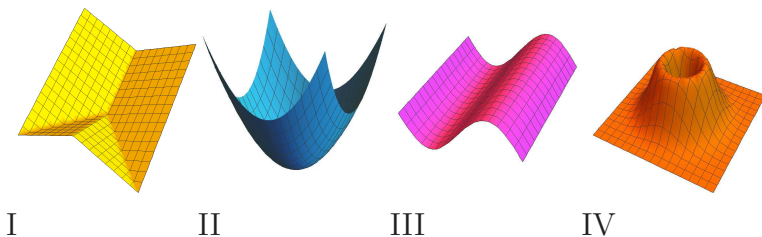
$\vec{r}(t) =$	Enter O-IV
$\langle \exp(-t^2), t \rangle$	
$\langle \cos(t), \sin(t) \rangle$	
$\langle \cos(3t) , \sin(5t) \rangle$	
$\langle 2t, 3t \rangle$	
$\langle t, t^2 + 1 \rangle$	

b) (2 points) Match the contour surfaces. Enter O, if there is no match.



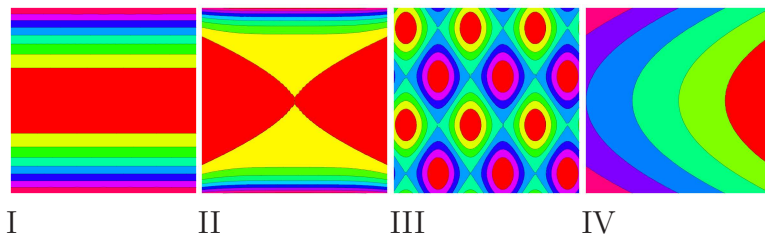
$g(x, y, z) =$	Enter O-IV
$x + 2y = 1$	
$x^2 - y^2 - z^2 = 1$	
$z^2 + 2y = 1$	
$y^2 - z^2 = 1$	
$x^2 + z^2 = 1$	

c) (2 points) Match the graphs of the functions $f(x, y)$. Enter O, if there is no match.



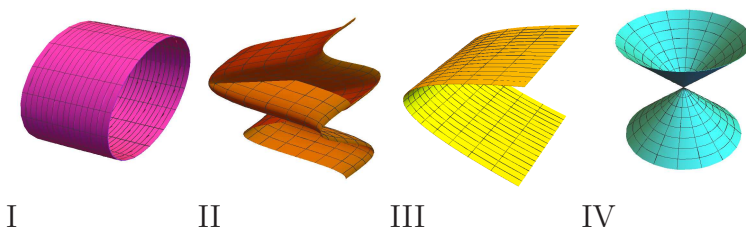
$f(x, y) =$	Enter O-IV
$\exp(-x^2 - y^2)(x^2 + y^2)$	
$\sin(x)$	
$\exp(-x^2 - y^2) \sin(x^2)$	
$ x + y $	
$x^2 + y^2$	

d) (2 points) Match functions $g(x, y)$ with contour maps. Enter O, if no match.



$g(x, y) =$	Enter O-IV
$\sin(3x) + \sin(2y)$	
$y^2 + x^2$	
$y^2 - 2x$	
y^2	
$y^6 - x^4$	

e) (2 points) Match the surface parametrization. Enter O, where is no match.



$\vec{r}(u, v) =$	Enter O,I-IV
$\langle u^2, v, u \rangle$	
$\langle u \cos(v), u \sin(v), u \rangle$	
$\langle \cos(u), \sin(v), u + v \rangle$	
$\langle v, \cos(u), \sin(u) \rangle$	
$\langle v, u, v \rangle$	

Problem 3) (10 points) No justifications are needed

In this problem \vec{v}, \vec{w} are arbitrary vectors in space, $\vec{r}(t)$ is an arbitrary space curve.

The vectors $\vec{v}, \vec{w}, \vec{r}', \vec{r}'', \vec{T}, \vec{T}'$ are assumed to be nonzero where \vec{N} is the normal vector and \vec{B} the bi-normal vector.

All these vectors $\vec{r}, \vec{T}, \vec{B}, \vec{N}$ and its derivatives are evaluated at the fixed time $t = 0$.

first vector	second vector	always parallel	always perpendicular	depends
\vec{r}'	\vec{r}''			
\vec{B}	\vec{N}			
$\text{Proj}_{\vec{v}}(\vec{w})$	\vec{v}			
$\text{Proj}_{\vec{v}}(\vec{w})$	\vec{w}			
$\vec{v} \times \vec{w}$	\vec{v}			
$\vec{w} + \vec{v}$	$\vec{v} - \vec{w}$			
$\vec{v} \times \vec{w}$	$\vec{w} \times \vec{v}$			
$(\vec{v} + \vec{w}) \times \vec{w}$	$\vec{v} \times \vec{w}$			
\vec{T}	\vec{r}'			
\vec{T}	\vec{T}'			

Problem 4) (10 points)

A parallelepiped has vertices at $A = (0, 0, 0), B = (1, 1, 1), C = (2, 3, 4)$ and $A' = (3, 4, 8)$ and contains the sides AB, AC and AA' .

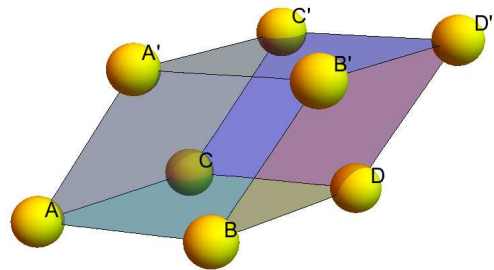
a) (2 points) Find a fourth point D so that A, B, C, D is a parallelogram.

b) (2 points) What is the area of that parallelogram $ABCD$?

c) (2 points) What is the volume of the parallelepiped?

d) (2 points) Find the height of the parallelepiped with floor $ABCD$ and roof A', B', C', D' .

e) (2 points) Find the distance between the face diagonals AD and $B'C'$.




Problem 5) (10 points)

Autumn is here. A leaf tumbles down along the curve

$$\vec{r}(t) = \langle t^2 \cos(t), t^2 \sin(t), 16 - 2t \rangle$$

in space.

- a) (3 points) What is the speed of the leaf at $t = \pi$?
- b) (7 points) Find the arc length of the curve traced in the time interval $-8 \leq t \leq 8$.



Problem 6) (10 points)

On September 21, 2014, SpaceX launched a Dragon capsule with tons of supplies and experiments including a 3D printer to the space station. Assume the rocket experiences an acceleration

$$\vec{r}''(t) = \langle 2t, 0, 3t^2 - 5t^4 \rangle$$

starts at Cape Canaveral Air force station $\vec{r}(0) = \langle 2, 3, 0 \rangle$ with zero velocity $\vec{r}'(0) = \langle 0, 0, 0 \rangle$.

- a) (5 points) Where is the capsule at time $t = 1$?
- b) (5 points) What is the curvature of the path at $t = 1$? You can use the formula $\kappa(t) = |\vec{r}'(t) \times \vec{r}''(t)| / |\vec{r}'(t)|^3$.

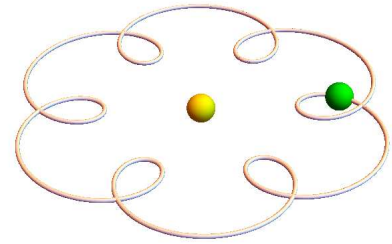


Problem 7) (10 points)

Before Kepler and Newton clarified planetary motion, there was the **Ptolemaic universe** which was based on the idea that planets move on epicycles like

$$\vec{r}(t) = \langle 3 \cos(t) + \cos(7t), \sin(t) + \sin(7t), 3 \rangle .$$

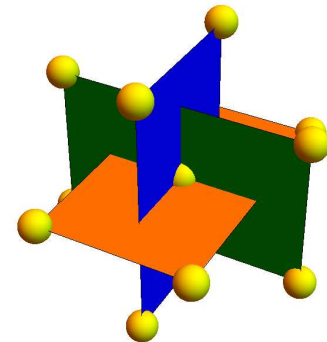
- a) (2 points) What is the velocity $\vec{v} = \vec{r}'(t)$ at $t = \pi$?
- b) (2 points) What is the velocity $\vec{w} = \vec{r}'(t)$ at $t = \pi/2$?
- c) (2 points) Yes or no? Is $\vec{v} \times \vec{w}$ parallel to the binormal vector $\vec{B}(t)$ for all times t ?
- d) (4 points) Parametrize the line tangent to the curve at the point $A = \vec{r}(\pi)$.



Problem 8) (10 points)

In this problem, the symbol φ is used to represent the golden ratio $\varphi = (\sqrt{5} + 1)/2 \sim 1.618$ which satisfies the equation $\varphi^2 = \varphi + 1$.

The centers of four unit spheres are placed in the xy -plane at $A = (1, \varphi, 0)$, $C = (-1, \varphi, 0)$, $B = (1, -\varphi, 0)$ and $D = (-1, -\varphi, 0)$. 8 further points are located in the same way in the yz and xz plane so that we get 12 points which form the vertices of an **icosahedron** and surround a unit sphere centered at $(0, 0, 0)$.




- a) (3 points) Consider the distances between the points A and B. Verify that the unit spheres centered at A and B do not intersect. Likewise, verify that the unit spheres centered at A and C do just intersect in a point.
- b) (2 points) Using the concept of an icosahedron, explain why all 12 spheres either pairwise do not intersect or intersect in a point.
- c) (3 points) The centers of all spheres have equal distance d from $(0, 0, 0)$. What is d in terms of φ ?
- d) (2 points) Why does the central unit sphere intersect all other unit spheres?

Isaac Newton and **James Gregory** argued whether 13 unit spheres can be placed around a central unit sphere just "kissing the central sphere". They knew that 12 work. Newton believed 13 is impossible, but it was only proven in 1954 that the **kissing number** is 12. Here we have seen how to place 12 spheres: by pushing the 12 spheres constructed here a bit so that they just touch the central sphere, you showed that they have positive distance from each other and solve the 12 sphere kissing problem. It is known since 2003 that the kissing number in 4 dimensions is 24 but nobody has any clue what the kissing number in 5 dimensions is! It is only known that the answer is between 40 and 44.

Problem 9) (10 points)

As a souvenir for this exam, we build a Monkey riding a “Monkey saddle” and 3D print it. No explanations are necessary.

- a) (2 points) Parametrize the hat $z = 5$.
- b) (2 points) Parametrize the saddle $z = yx^2 - x^3$.
- c) (2 points) Parametrize the torso $x^2 + y^2 + \frac{(z-1)^4}{4} = 1$.
- d) (2 points) Parametrize the head $4x^2 + y^2 + (z-4)^2 = 1$.
- e) (2 points) Parametrize the monkey tail $x^2 + z^2 = \frac{1}{4}$.



Problem 10) (10 points)

This June 2014, the Swiss extreme sports women **Géraldine Fasnacht** jumped with a wing-suit from the Matterhorn (a mountain in Switzerland). When flying with a wingsuit, there is the gravitational force, the force from the wind and a force from the wing. Assume

$$\vec{r}''(t) = \langle 1, t, \exp(-t) - 10 \rangle$$

and $\vec{r}(0) = \langle 0, 0, 4500 \rangle$ and $\vec{r}'(0) = \langle 0, 2, 0 \rangle$. Find the path $\vec{r}(t)$.

